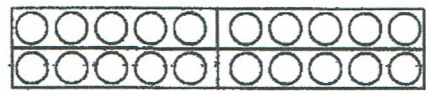
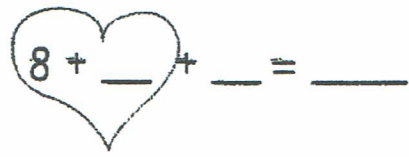


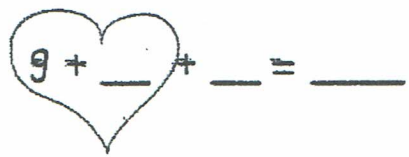
Erst bis zum Zehner, dann weiter




8 + 7 = ____



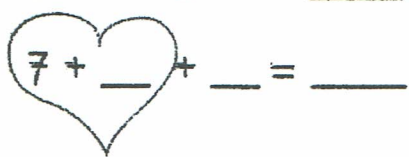
9 + 6 = ____



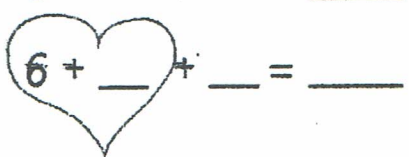
8 + 6 = ____



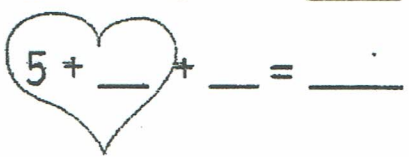
7 + 8 = ____



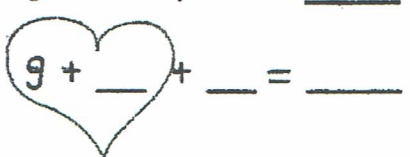
6 + 7 = ____



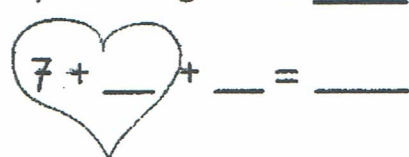
5 + 8 = ____



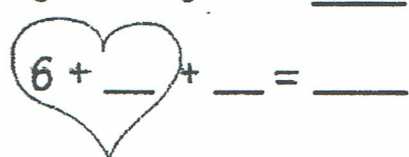
9 + 4 = ____



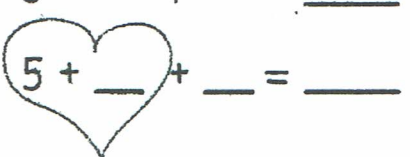
7 + 5 = ____



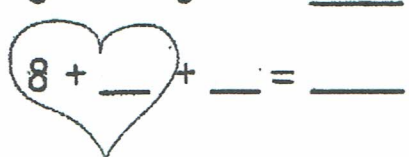
6 + 9 = ____



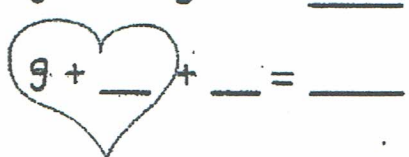
5 + 7 = ____



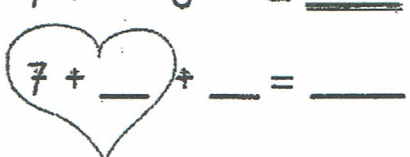
8 + 6 = ____



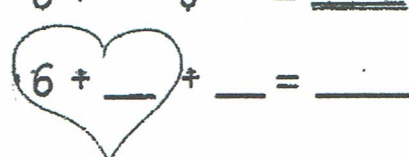
9 + 5 = ____



7 + 8 = ____



6 + 9 = ____



8 + 4 = ____

