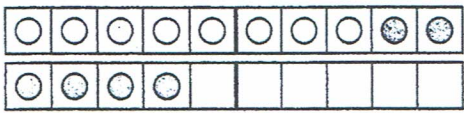


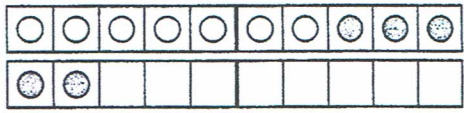
In zwei Schritten über die Zehn

Rechne die Aufgaben aus.



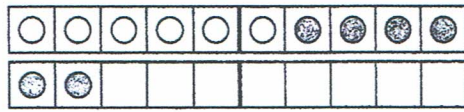
$$8 + 6 = \square$$

$$8 + 2 + \square = \square$$



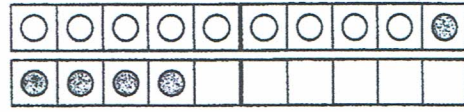
$$7 + 5 = \square$$

$$7 + \square + \square = \square$$



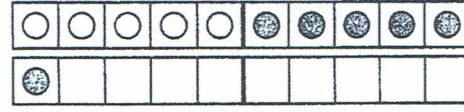
$$6 + 6 = \square$$

$$\square + \square + \square = \square$$



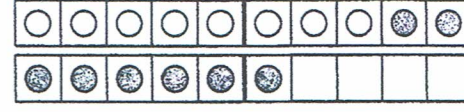
$$9 + 5 = \square$$

$$\square + \square + \square = \square$$



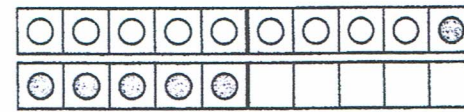
$$5 + 6 = \square$$

$$\square + \square + \square = \square$$



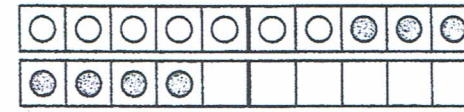
$$8 + 8 = \square$$

$$\square + \square + \square = \square$$



$$9 + 6 = \square$$

$$\square + \square + \square = \square$$



$$7 + 7 = \square$$

$$\square + \square + \square = \square$$