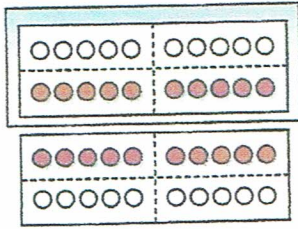
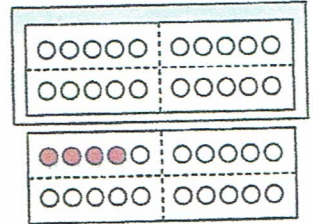
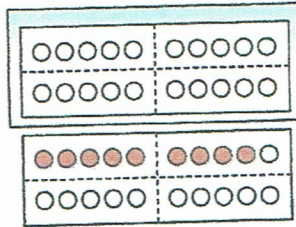
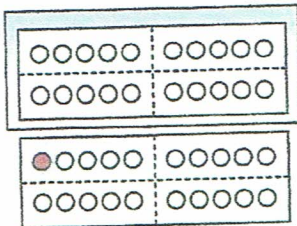
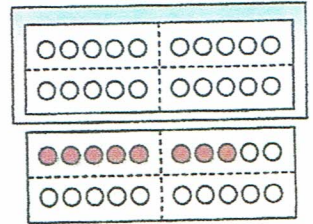
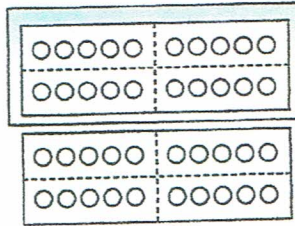
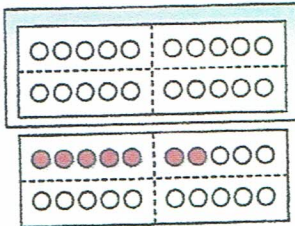
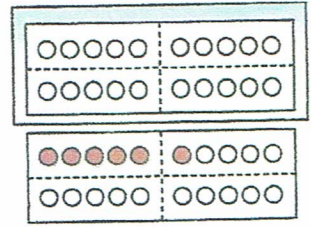
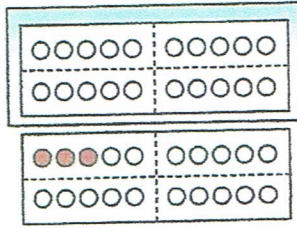


Verdoppeln



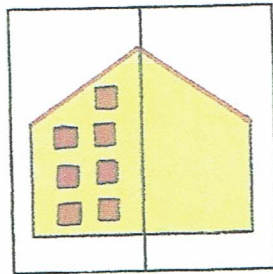

① Verdopple. Zeichne und rechne.



$10 + 10 = 20$



② Immer das Doppelte!



$3 + 3 = \underline{\quad}$

$\underline{\quad} \bigcirc \underline{\quad} = \underline{\quad}$

$\underline{\quad} \bigcirc \underline{\quad} = \underline{\quad}$

$\underline{\quad} \bigcirc \underline{\quad} = \underline{\quad}$

③

Zahl	2	4	6	8	10	11	3	5	7	9	0
das Doppelte	4										



④

Zahl	9										
das Doppelte	18	14	8	4	20	10	16	6	12	2	0