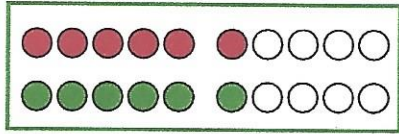
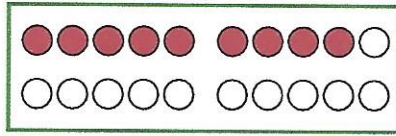


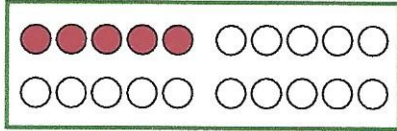
Verdopple und schreibe die Plus-Aufgabe.



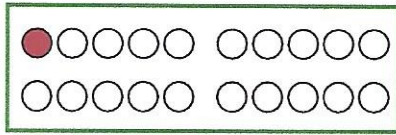
$6 + 6 = 12$



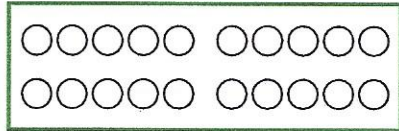
___ + ___ = ___



___ + ___ = ___

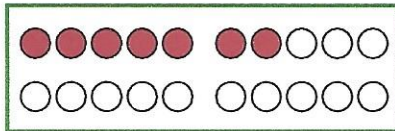


___ + ___ = ___

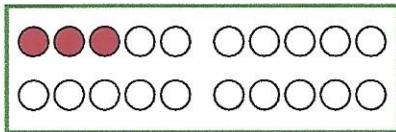


___ + ___ = ___

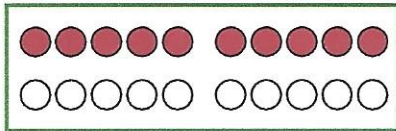
Verdopple und schreibe die Plus-Aufgabe.




___ + ___ = ___



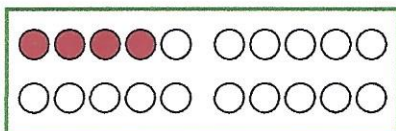
___ + ___ = ___



___ + ___ = ___



___ + ___ = ___



___ + ___ = ___