


Verdoppeln und Halbieren


1 Verdopple! Zeichne und rechne!




$$\square \circ \square = \square$$



$$\square \circ \square = \square$$

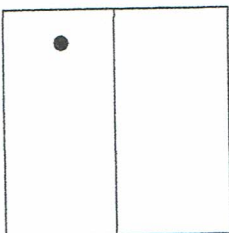


$$\square \circ \square = \square$$

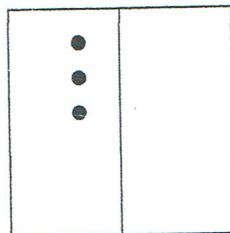


$$\square \circ \square = \square$$

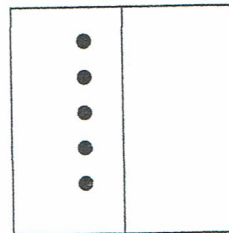
2 Zeichne und rechne!



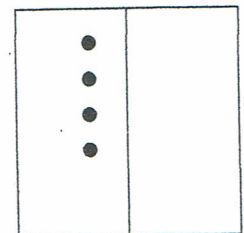
$$\square \circ \square = \square$$



$$\square \circ \square = \square$$

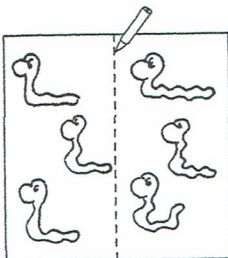


$$\square \circ \square = \square$$




$$\square \circ \square = \square$$


3 Halbiere und rechne!



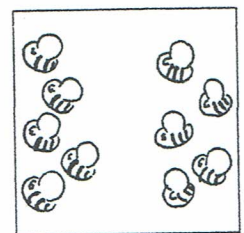
$$\square \circ \square = \square$$



$$\square \circ \square = \square$$

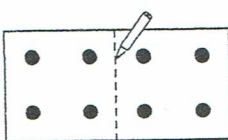


$$\square \circ \square = \square$$



$$\square \circ \square = \square$$


4 Halbiere und rechne!




$$\square \circ \square = \square$$



$$\square \circ \square = \square$$



$$\square \circ \square = \square$$



$$\square \circ \square = \square$$